

YEAR 3 BASIC ASSESSMENT

1.
$$\begin{array}{r} 37 \\ +18 \\ \hline \end{array}$$

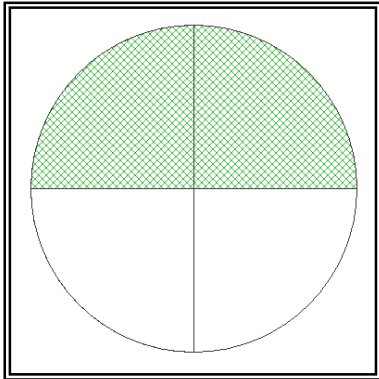
2.
$$\begin{array}{r} 67 \\ -41 \\ \hline \end{array}$$

3.
$$\begin{array}{r} 15 \\ \times 3 \\ \hline \end{array}$$

4.
$$\begin{array}{r} 81 \\ -54 \\ \hline \end{array}$$

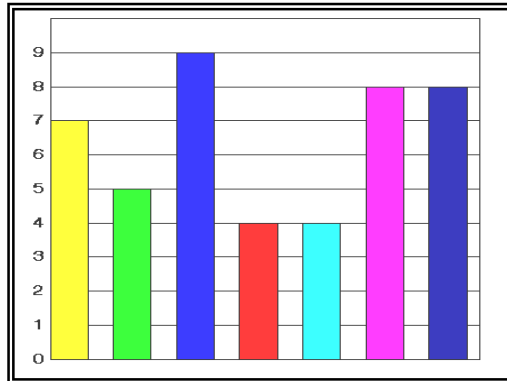
5.
$$\begin{array}{r} \square \\ 5 \overline{)45} \end{array}$$

6. What fraction of the circle is shaded?

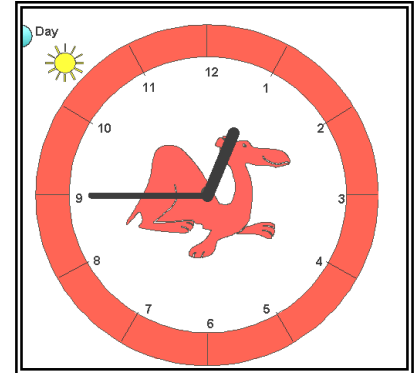


OR

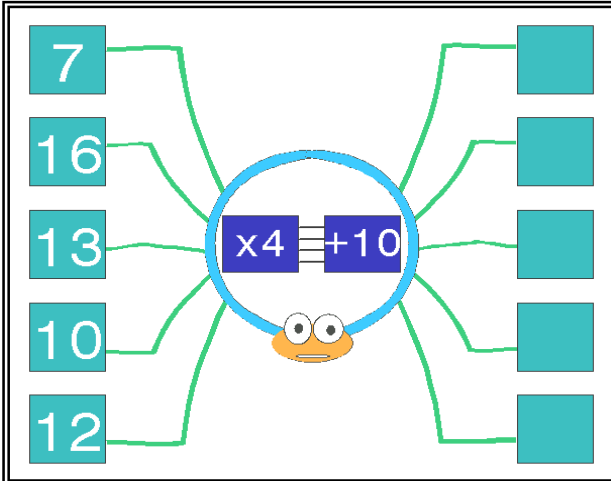
7. The columns are for place values from millions to units. What is the number?

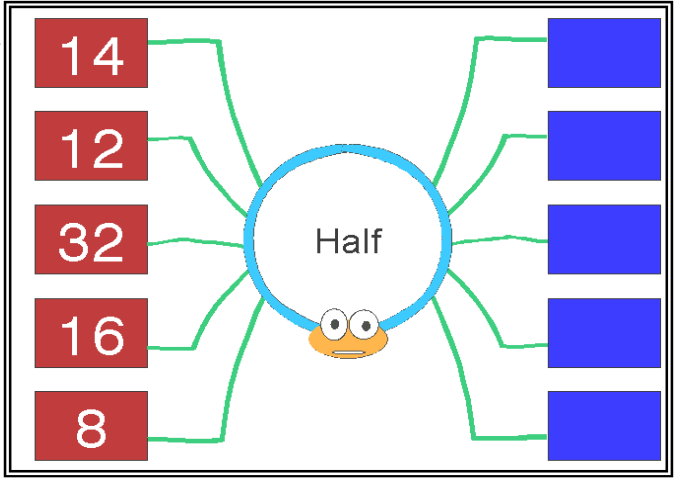


8. Give the time in words.



9. Our home is 6 km from school.
 How far do I travel to school and back in 7 weeks of 5 schooldays each?

10. 

11. 

12. What is the next number in this pattern?

25 29 33 37